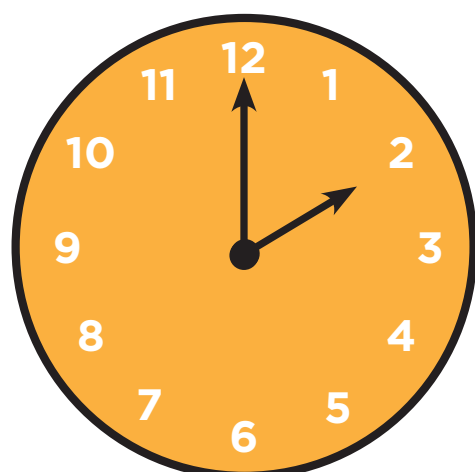


# WHAT TIME IS IT?

## TIME TERMS

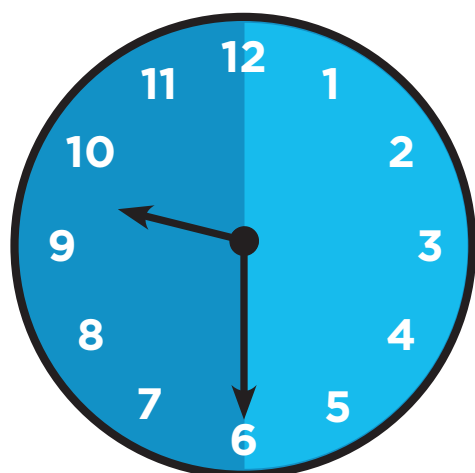


### **HOOR**

1 hour = 60 minutes

Say it: Two o'clock

Write it: 2:00

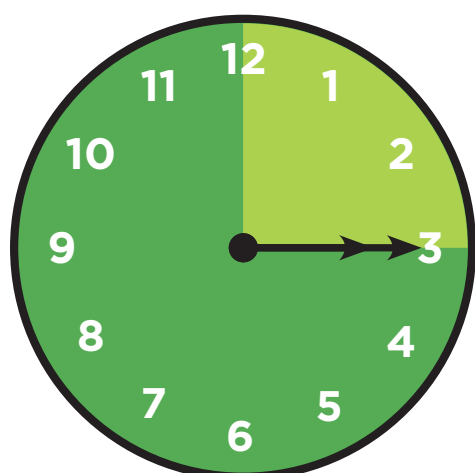


### **HALF HOUR**

1 half hour = 30 minutes

Say it: Half past nine

Write it: 9:30



### **QUARTER HOUR**

1 quarter of an hour = 15 minutes

Say it: Quarter past three

Write it: 3:15



[scholastic.com/timextimemachines](https://www.scholastic.com/timextimemachines)

 SCHOLASTIC

Sponsored Content

