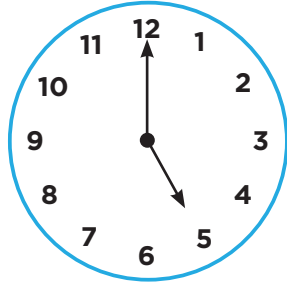


Traveling Through Time

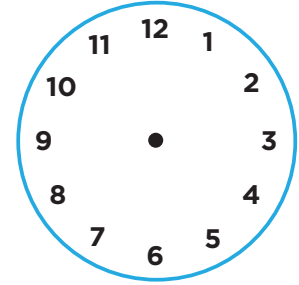


If you know what time it is now, you can find out both past and future times! Draw the hour and minute hands on the blank clock to complete each sentence.

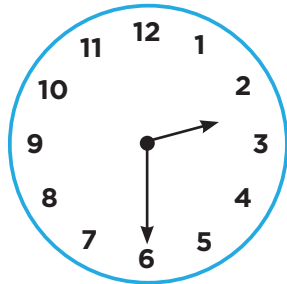
1. It is



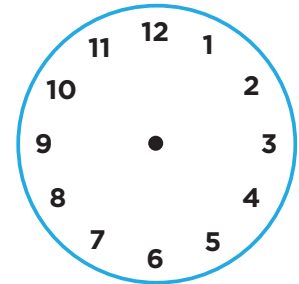
so in two hours
it will be



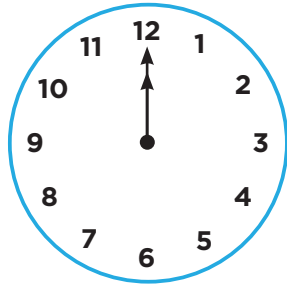
2. It is



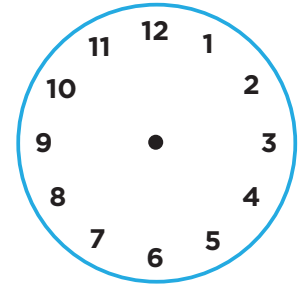
so 1 hour ago
it was



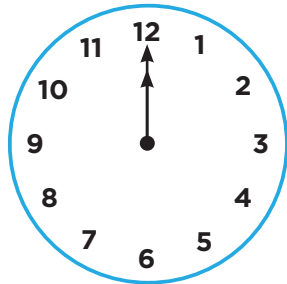
3. It is



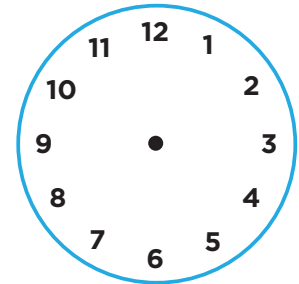
so in 1 hour
it will be



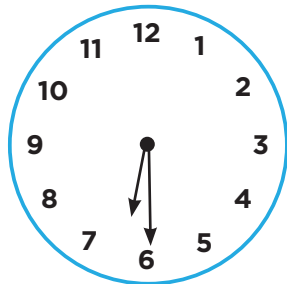
4. It is



so in 3 hours
it will be



5. It is



so 4 hours ago
it was

