

How Many Extinct Dinosaurs?

Solve the problem. Show your work.

There were 12 dinosaurs near the volcano.

Then 5 of them ran to the forest.

How many of the dinosaurs stayed near the volcano?




How Many Fossils?

Solve the problem. Show your work.

There were 16 dinosaur fossils.

Then 7 of them were taken to the museum.

How many of the fossils were left?




How Many Toys?

Solve the problem. Show your work.

Max had 12 toy dinosaurs.

He gave 4 of them to Rose.

How many of the dinosaurs did Max have then?




How Many Feathers?

Solve the problem. Show your work.

There were 12 dinosaurs discovered.

Paleontologists decided 7 of them had feathers.

How many of the dinosaurs did not have feathers?



Roll and Record Subtraction

1	2	3	4	5	6	7	8	9	10	11		