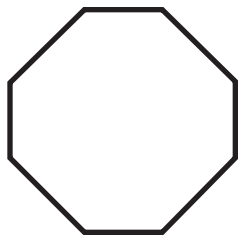


Name _____

Skill: Naming Polygons

Write the name of each shape and the number of sides.


1.



shape _____

sides _____

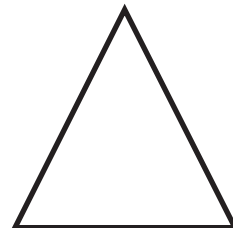
2.



shape _____

sides _____


3.



shape _____

sides _____


4.



shape _____

sides _____

5.



shape _____

sides _____

6.

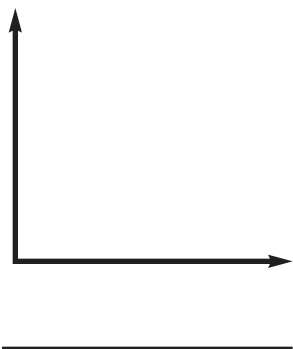


shape _____

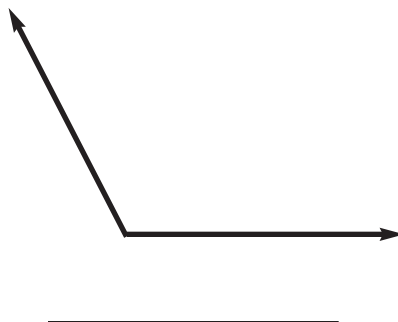
sides _____

Write the name of the type of angle shown.

7.



8.



9.

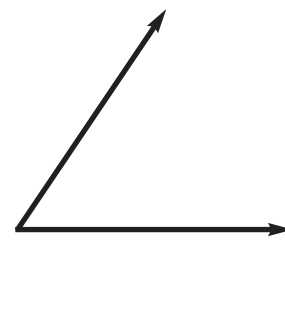



Figure _____

Write the name of each shape and the number of sides.


1. 

name

octagon

sides

8


2. 

name

hexagon

sides

6


3. 

name

triangle

sides

3


4. 

name

pentagon

sides

5


5. 

name

heptagon

sides

7


6. 

name

quadrilateral


sides

4

7. 


name

right angle

8. 

name

obtuse

9. 

name

acute

Write the name of the type of angle shown.