



Name _____

Skill: Learning Five Minute Intervals


Draw a circle around the correct time underneath each clock.




2:20 2:35 1:30




6:30 5:40 5:50




6:35 7:35 1:10




2:25 6:40 1:25




11:55 12:00 3:05




10:15 12:50 12:20




10:10 10:25 1:50




1:20 4:05 7:25



9:35 8:40 8:20



4:10 3:10 2:20















11:25 10:25 9:15

Answer Key

Name _____

Unit 1 Learning Time Minutes

Draw a circle around the correct time underneath each clock.

			
6:30 8:30 8:30	6:30 8:30 8:30	6:30 8:30 8:30	6:30 8:30 8:30
			
6:30 8:30 8:30	6:30 8:30 8:30	6:30 8:30 8:30	6:30 8:30 8:30
			
6:30 8:30 8:30	6:30 8:30 8:30	6:30 8:30 8:30	6:30 8:30 8:30

16

Page 16