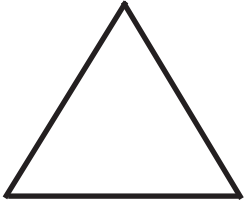
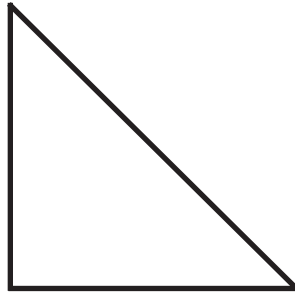


Name _____

Skill: Classifying Triangles

Use a ruler to measure the sides of the triangles. Classify each triangle as equilateral, isosceles or scalene.








Draw and label each of the following types of angles in the space below.

1. scalene
2. isosceles
3. equilateral
4. obtuse isosceles triangle
5. right triangle
6. acute scalene triangle


Name: _____

Unit: Classifying Triangles


Use a ruler to measure the sides of the triangles. Classify each triangle as equilateral, isosceles, or scalene.



equilateral



isosceles



scalene

Draw and label each of the following types of triangles in the space below.

1. equilateral


2. isosceles

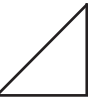
3. scalene

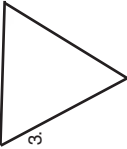
4. obtuse scalene triangle


5. right triangle


6. acute scalene triangle


1. 

2. 

3. 

4. 

5. 

6. 

39

Page 39