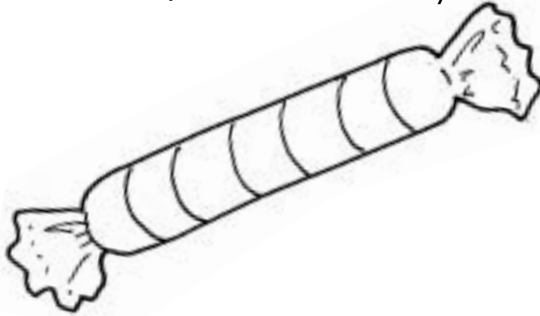




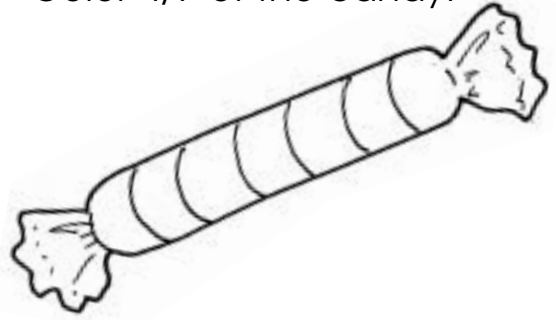
Fractions

A fraction has two numbers. The top number will tell you how many parts to color. The bottom number tells you how many total parts there are.

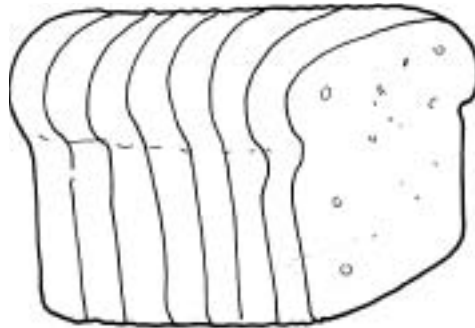
Color $\frac{1}{7}$ of the candy.



Color $\frac{4}{7}$ of the candy.




This loaf of bread is cut into 7 slices.



Could you color $\frac{8}{7}$ of the bread? _____

Explain your answer. _____

Color $\frac{7}{7}$ of the bananas.



Color $\frac{3}{7}$ of the peanut butter jars.

