











# Telling Time

Write the time shown on each clock on the line.


1.  ____ : ____	2.  ____ : ____	3.  ____ : ____	4.  ____ : ____
5.  ____ : ____	6.  ____ : ____	7.  ____ : ____	8.  ____ : ____

9. Write the times in order from earliest to latest, starting at 1:00.


\_\_\_\_ , \_\_\_\_ , \_\_\_\_ , \_\_\_\_ , \_\_\_\_ , \_\_\_\_ , \_\_\_\_ , \_\_\_\_

10. Draw the hands on each clock to show the time you do each activity.


I get up each morning at



I eat dinner at



I eat breakfast at



I go to bed at

